

Counting by Tens

Great Grapes

There are 10 grapes in each bunch.



10



20



30



40



50



60



70



80



90



100

There are 100 grapes.


COUNT by tens to count the grapes. Then WRITE the number.




1




2



3

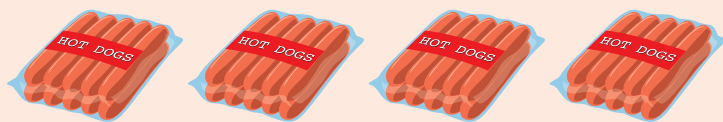


4




Hot Dog!

Hot dogs come in packages of 10. COUNT by tens to count the hot dogs. Then WRITE the number.



1



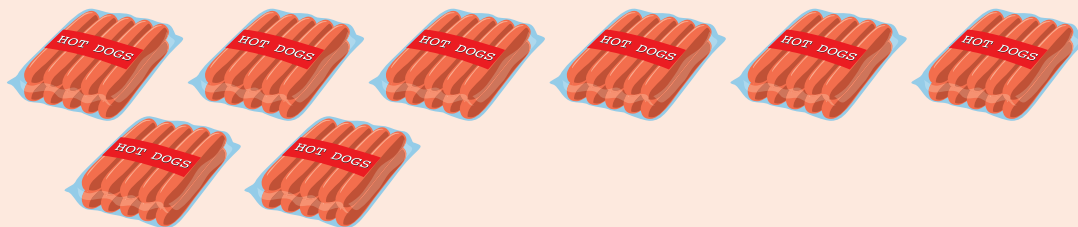
2



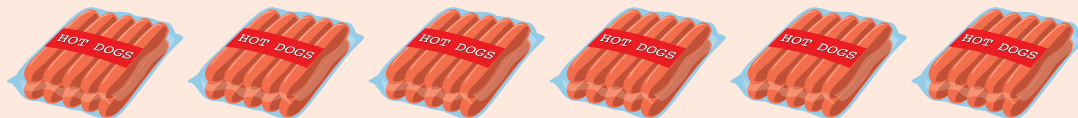
3



4



5




6

Counting by Tens

Enjoy the View

There are eight staircases to climb to the top of the hill to enjoy the view. Each staircase has 10 steps. COUNT by tens to count all the steps. Then WRITE the number of steps to get to the top of the hill.





Candy Count

CIRCLE groups of 10 jellybeans to help you count. Then WRITE the number of jellybeans.

|
